

UNIT 7 Diagnostic

Name: _____


Class: _____

① Classify the following jobs into the primary, secondary or tertiary sectors.


tourist guide ~~fisherman~~ baker farmer carpenter
 factory worker miner bus driver teacher

| Primary sector | Secondary sector | Tertiary sector |
|------------------|------------------|-----------------|
| <i>fisherman</i> | | |
| | | |
| | | |
| | | |

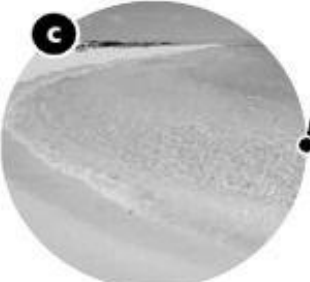
② Match these images and places to the corresponding forms of tourism.



a



b



c

beach tourism

winter tourism

cultural tourism

Costa Brava

Sierra Nevada

Madrid

Sevilla

the Pyrenees

Costa del Sol

Barcelona

Islas Canarias

Santiago de Compostela

Cordillera Cantábrica