

MATEMÁTICAS INFANTIL

CUADERNO DE NUMERACIÓN

Cuaderno de numeración para 5 años.

PACO MANOLO
2020 - 2021

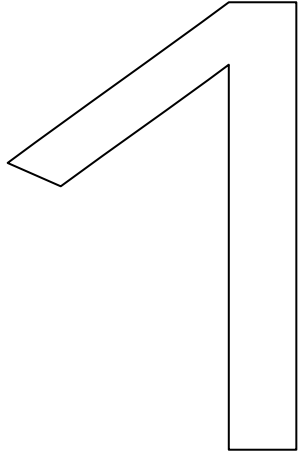
Este cuaderno está ideado para trabajar las matemáticas, en especial series numéricas, sumas, restas.

Debemos repasar todas las grafías, primero con lápiz normal y después con bicolor.

No es necesario hacer todas las fichas, pueden imprimir las que más interesen.

Al final del cuaderno, la última ficha, es una plantilla para poder realizar otras operaciones.

Colorea o rellena el número



Uno

Colorear el gato.




Dibujar un gato

Repasar y escribir el número uno



NOMBRE:.....FECHA:.....

Colorea o rellena el número



Colorear los gatos.




Dibujar dos gatos

Repasar y escribir el número dos



NOMBRE:.....FECHA:.....

Relaciona cantidad grafía., repasar n° adecuado.



1

2

2 2 2 2 2 2 2

1 1 1 1 1 1 1


Dos 2 dos 2 dos 2 dos 2 dos 2 dos 2 dos 2 dos 2

- - - - - m m m m m m m m m m

1 2 1 2 1 2 1 2 1 2

NOMBRE:.....FECHA:.....

Colorea o rellena el número



Tres

Colorear los gatos.




Dibujar tres gatos

Repasar y escribir el número tres




NOMBRE: FECHA:

Colorea o rellena el número



Tres

Colorear los castillos




Dibujar tres casas.

Repasar y escribir el número tres



NOMBRE:.....FECHA:.....

Relaciona cantidad grafía., repasar n° adecuado.



3

2

3 3 3 3 3 3 3

2 2 2 2 2 2 2

Tres 3 castillos

tres 3 castillos

tres 3 castillos.

- - - - - m m m m m m m m m m m

1

2

3

1

2

3


1

2

3

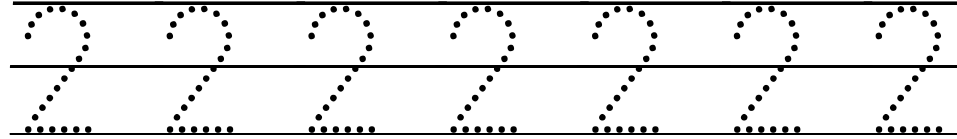
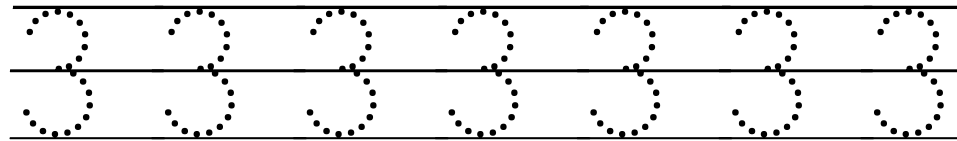
NOMBRE:.....FECHA:.....

Relaciona cantidad gráfica., repasar n° adecuado.



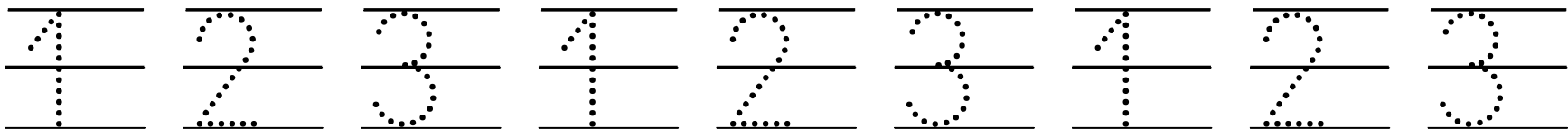
3

2



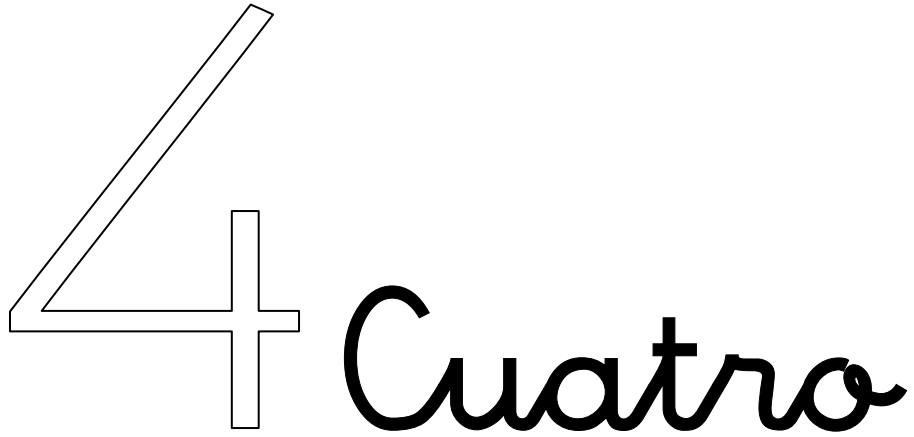
Tres 3 tres 3 tres 3 tres 3 tres 3 tres 3 tres 3 tres

- - - - - m m m m m m m m m m m



NOMBRE:FECHA:

Colorea o rellena el número

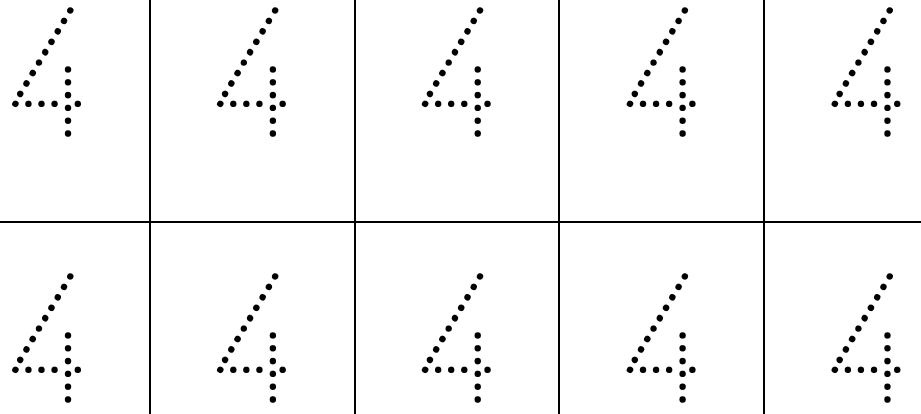


Colorea los gatos.




Dibujar 4 gatos

Repasar y escribir el número cuatro.



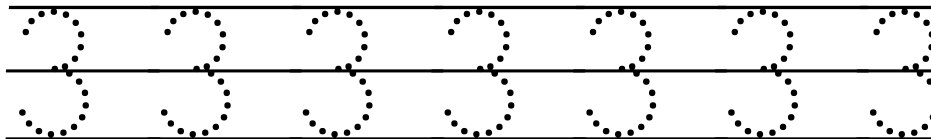
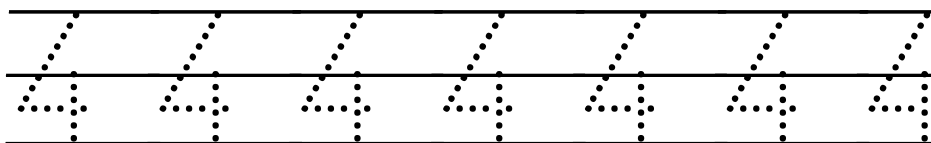
NOMBRE:.....FECHA:.....

Relaciona cantidad grafía., repasar n° adecuado.



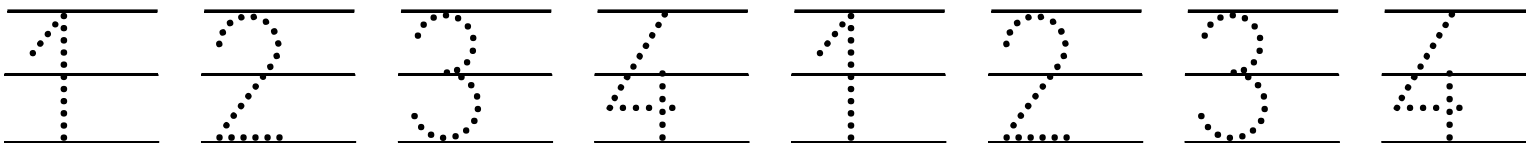
4

3



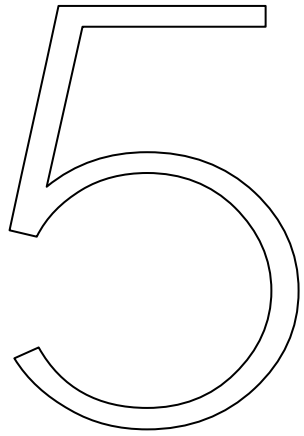
Cuatro 4 cuatro 4 cuatro 4 cuatro 4 cuatro 4

M m



NOMBRE:.....FECHA:.....

Colorea o rellena el número



Cinco

Colorea los gatos



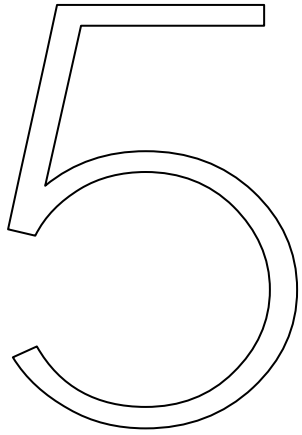
Dibujar 5 gatos

Repasar y escribir el número cinco.



NOMBRE:.....FECHA:.....

Colorea o rellena el número



Cinco

Colorea los globos terráneos.



Dibujar 5 globos.

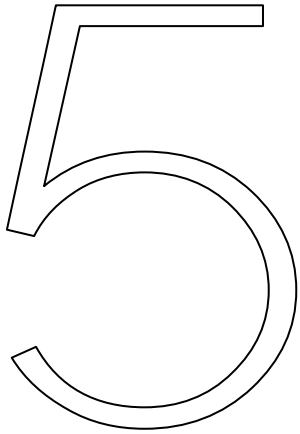


Repasar el número cinco.



NOMBRE: FECHA:

Colorea o rellena el número



Cinco

Colorea los camellos.



Repasar el número cinco.



Repasar el número cinco.



NOMBRE:.....FECHA:.....

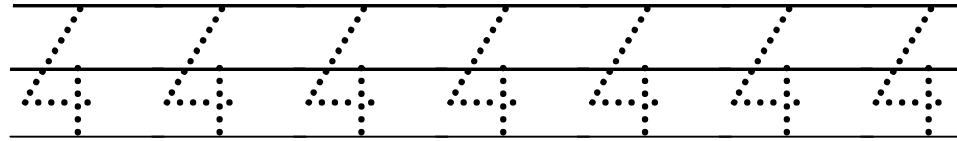
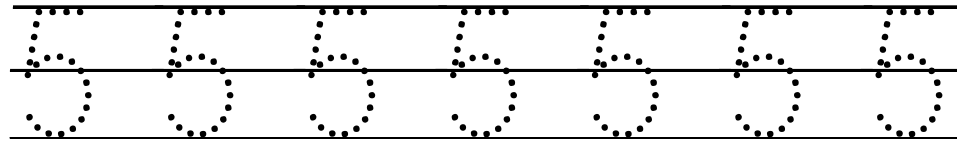
Relaciona cantidad gráfica., repasar n° adecuado.



5

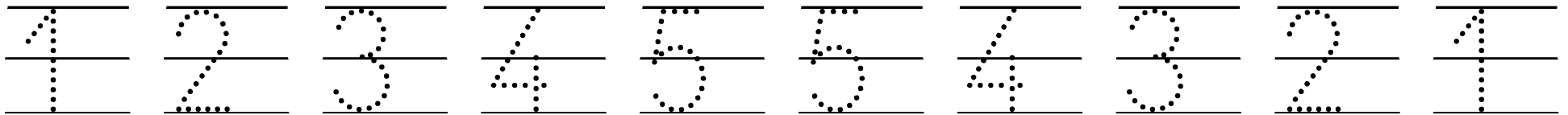


4




Cinco 5 cinco 5 cinco 5 cinco 5 cinco 5

M m




NOMBRE:.....FECHA:.....

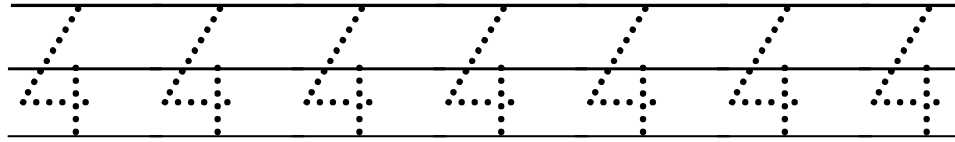
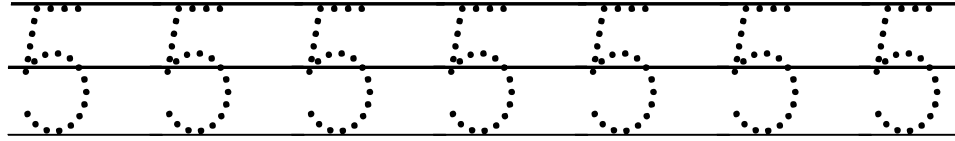
Relaciona cantidad grafía., repasar n° adecuado.



5



4



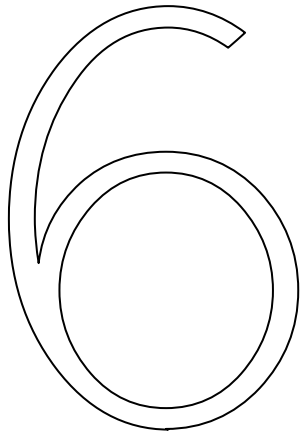
Cinco 5 cinco 5 cinco 5 cinco 5 cinco 5

M m



NOMBRE:.....FECHA:.....

Colorea o rellena el número



Seis

Colorea los gatos




Dibujar 6 gatos

Repasar y escribir el número uno



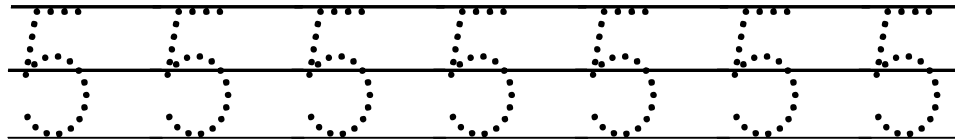
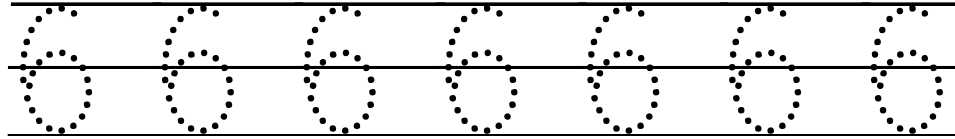
NOMBRE:.....FECHA:.....

Relaciona cantidad grafía., repasar nº adecuado...



6

5



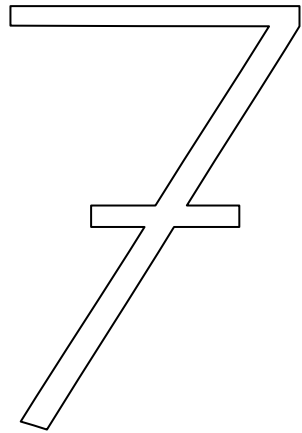
Seis 6 seis 6 seis 6 seis 6 seis 6 seis 6

M m

0 1 2 3 4 5 6 6 5 4 3 2 1 0


NOMBRE:.....FECHA:.....

Colorea o rellena el número



Siete

Colorea los gatos



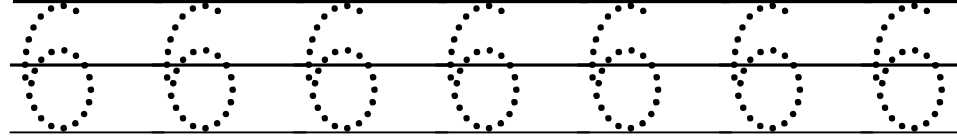
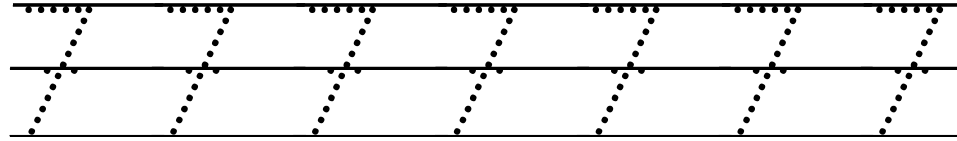

Dibujar 7 gatos

Repasar y escribir el número uno



NOMBRE:.....FECHA:.....

Relaciona cantidad grafía., repasar n° adecuado...



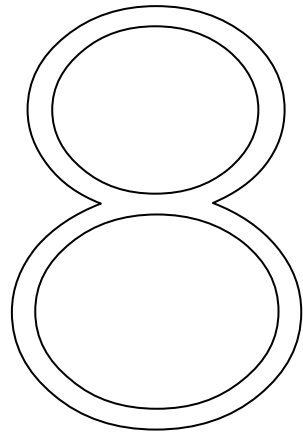
Siete 7 siete 7 siete 7 siete 7

M m

0 1 2 3 4 5 6 7 7 6 5 4 3 2 1 0


NOMBRE:FECHA:

Colorea o rellena el número



Ocho

Colorea los gatos




Dibujar 8 gatos

Repasar y escribir el número uno



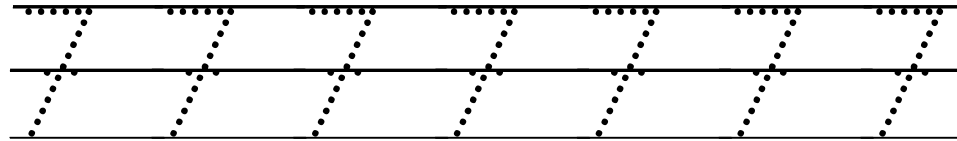
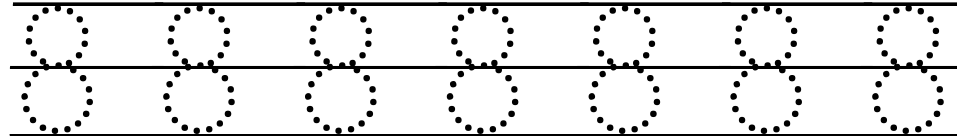
NOMBRE:.....FECHA:.....

Relaciona cantidad grafía., repasar n° adecuado...



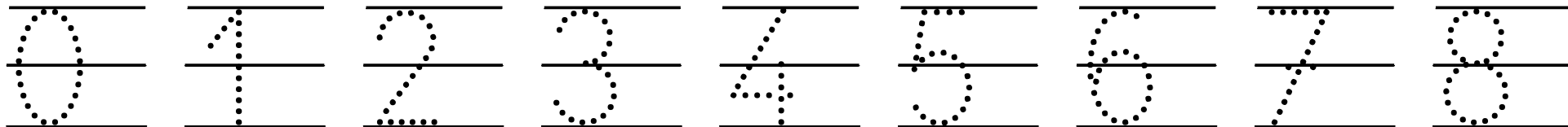
8

7



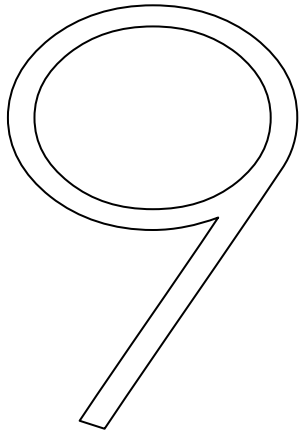
Ocho 8 ocho 8 ocho 8 ocho 8 ocho

M m




NOMBRE:.....FECHA:.....

Colorea o rellena el número



Nueve

Colorea los gatos



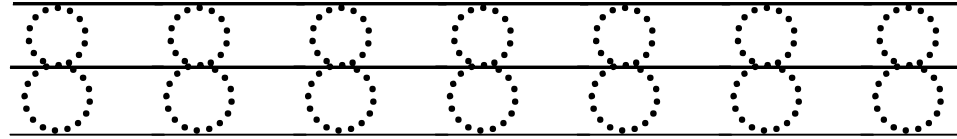
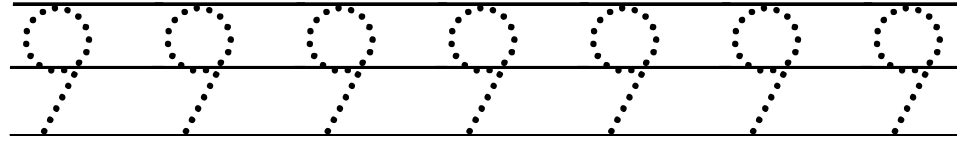

Dibujar 9 gatos

Repasar y escribir el número uno



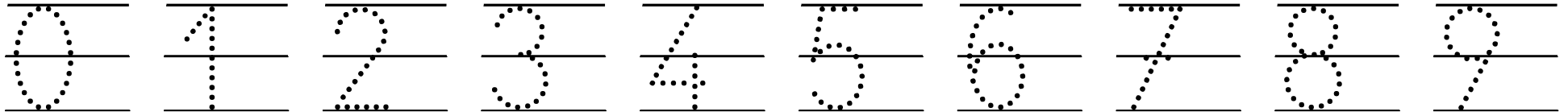
NOMBRE:FECHA:

Relaciona cantidad grafía., repasar n° adecuado...



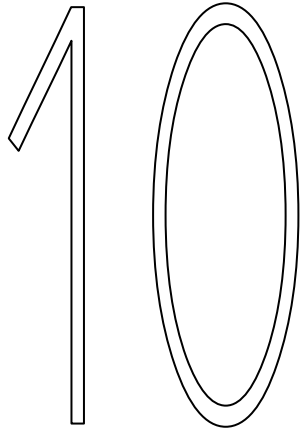
Nueve 9 nueve 9 nueve 9 nueve 9

M m




NOMBRE:.....FECHA:.....

Colorea o rellena el número



Diez

Colorea los gatos



Dibujar 10 gatos

Repasar y escribir el número uno

10

10

10

10

10

10

10


10

10

10

NOMBRE: FECHA:

Relaciona cantidad grafía., repasar n° adecuado...



10

9

10 10 10 10

9 9 9 9 9 9 9

Diez 10 diez 10 diez 10 diez 10 diez

M m

0 1 2 3 4 5 6 7 8 9 10

NOMBRE:.....FECHA:.....



cero

cero

cero

0

0

0

0

0

0

0

0

0

0

0

0

0

0

0

0

0

0

0

0

0

0

0

0


0

0

0

cero

0





uno

uno

uno

1

1

1

1

1

1

1

1

1

1

1

1

1

1

1

1

1

1

1

1


1

1

1

1 □

1 

1 

1

1

uno

1





dos

dos

dos

2

2

2

2

2

2

2

2

2

2

2

2

2

2

2

2

2

2


2

2

2

2

2

2 

2 


2 

2

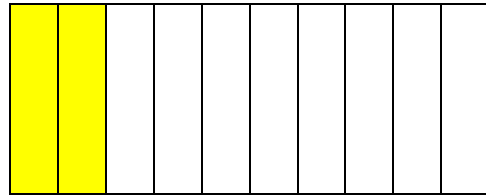
dos

2

2

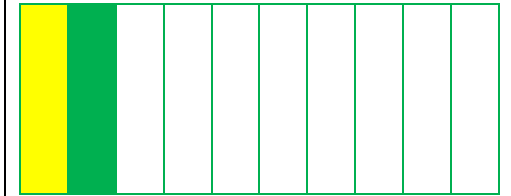


	2
+	0

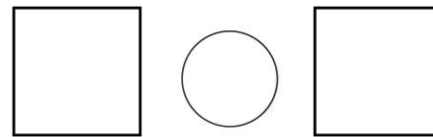
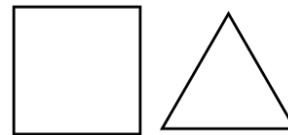



2

	1
+	1




2



2 2 2 2 2 2 2 2 2 2

2	+	0	=	
---	---	---	---	--

1	+	2	=	
---	---	---	---	--



tres

tres

tres

3

3

3

3

3

3

3

3

3

3

3

3

3

3

3

3

3

3

3

3

3

3

3

3

3

3

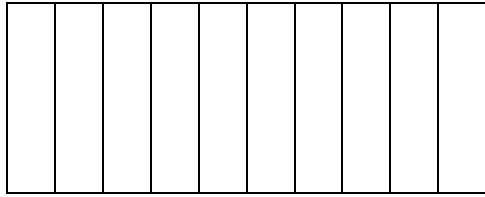
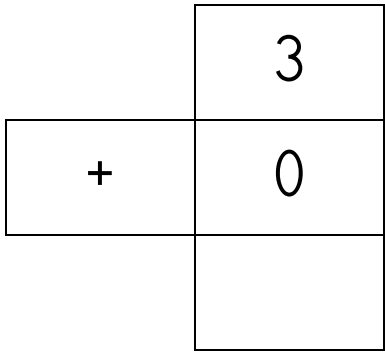
3

3

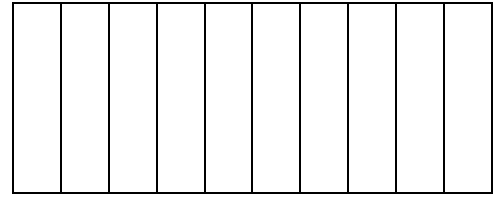
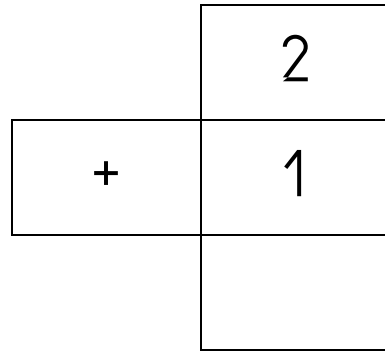
tres

3

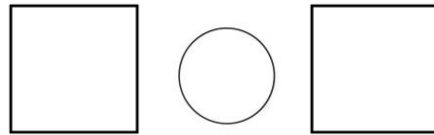
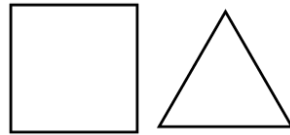
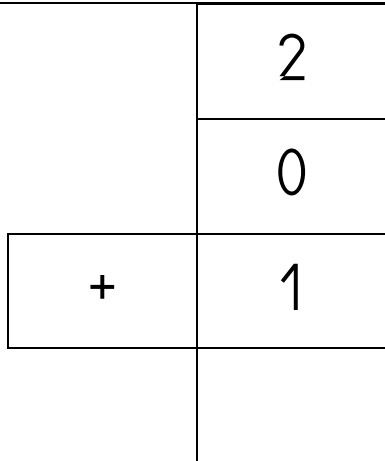
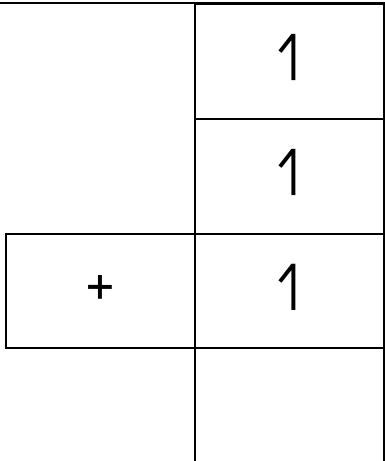




3



3



3

3

3

3

3

3

3

3

3

3

2

+

1

=

--

0

+

3

=

--

1 2 3 1 2 3 1 2 3

1 1 1 1 1 1 1 1 1 1

2 2 2 2 2 2 2 2 2 2

3 3 3 3 3 3 3 3 3 3

0 1 2 3

3 2 1 0

0

2

3

0



cuatro

cuatro

cuatro

4

4

4

4

4

4

4

4

4

4

4

4

4

4

4

4

4

4

4

4

4

4

4

4

4

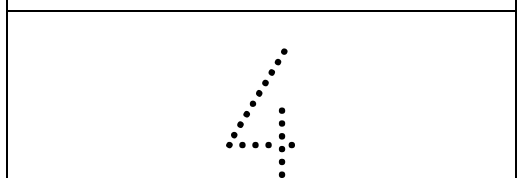
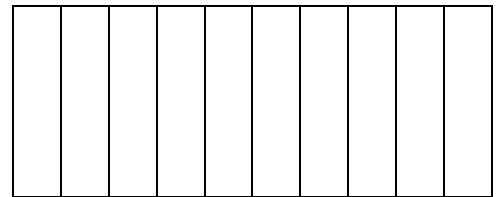
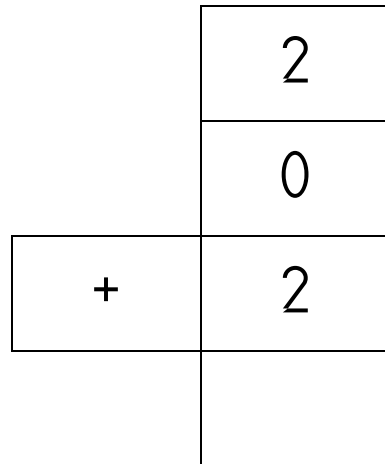
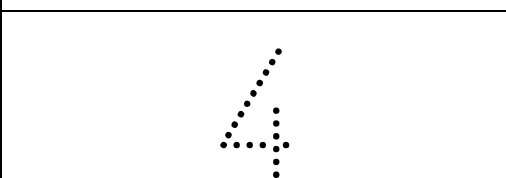
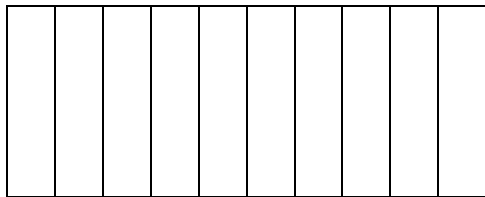
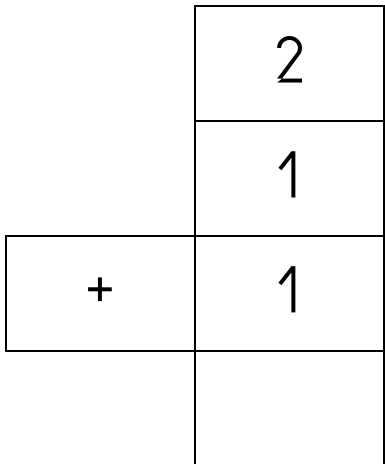
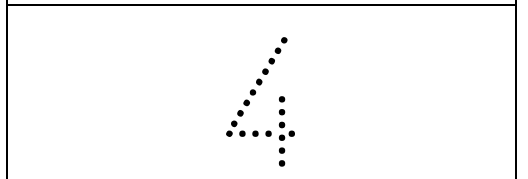
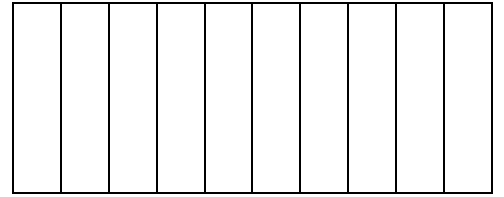
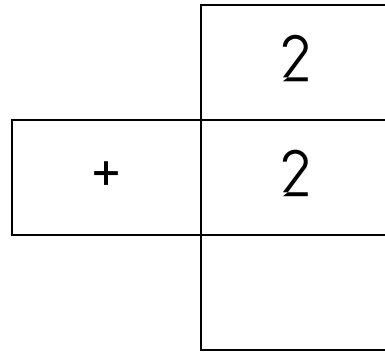
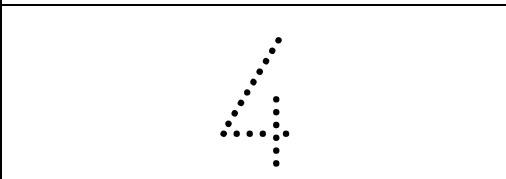
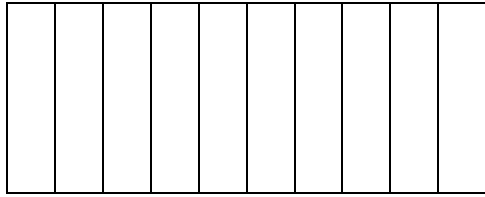
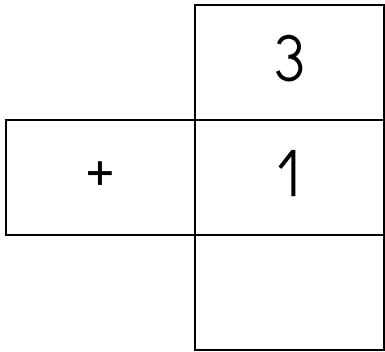
4

4

cuatro

4





2

+

2

=

4

+

0

=

1 2 3 4 1 2 3 4

2 2 2 2 2 2 2 2 2 2

3 3 3 3 3 3 3 3 3 3

4 4 4 4 4 4 4 4 4 4

0 1 2 3 4 | 4 3 2 1 0

0		2		4		4				0
---	--	---	--	---	--	---	--	--	--	---



cinco

cinco

cinco

5

5

5

5

5

5

5

5

5

5

5

5

5

5

5

5

5

5

5

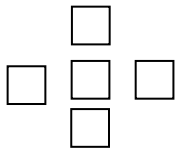
5

5

5

5

5



5

5

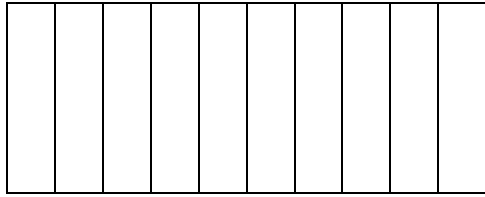


5

5

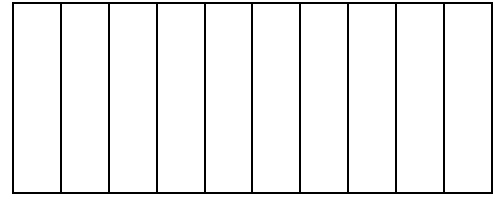
5

	2
+	3



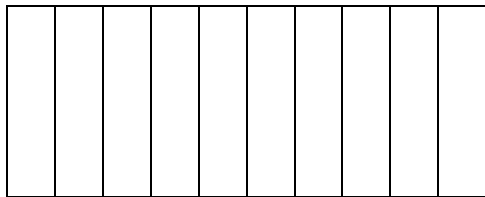
5

	1
+	4



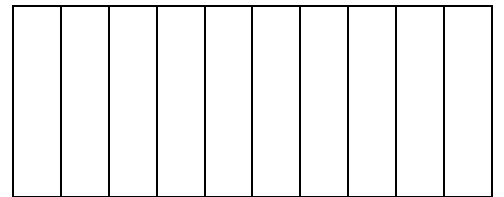
5

	2
	2
+	1



5

	2
	0
+	3



5

5

5

5

5

5

5

5

5

5

5

4

+

1

=

0

+

5

=

2 2 2 2 2 2 2 2 2 2

3 3 3 3 3 3 3 3 3 3

4 4 4 4 4 4 4 4 4 4

5 5 5 5 5 5 5 5 5 5

0 1 2 3 4 5

5 4 3 2 1 0

0

3

4

5

2

0



seis

seis

seis

6

6

6

6

6

6

6

6

6

6

6

6

6

6

6

6

6

6

6

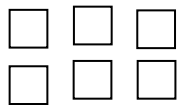
6

6

6

6

6



6

6

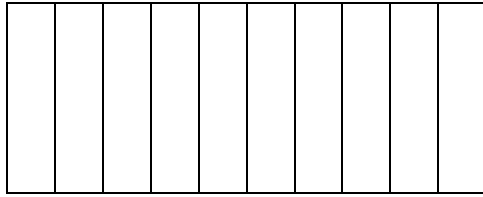
6

6

6

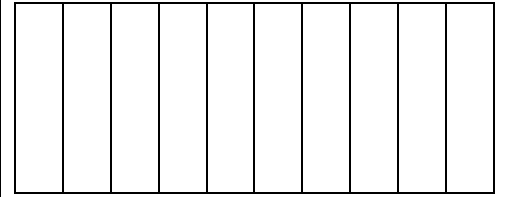


	0
+	6



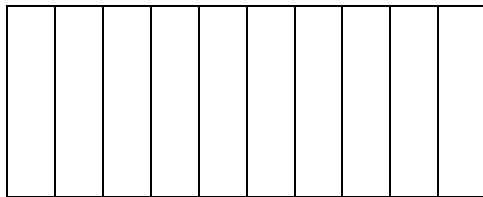
6

	3
+	3



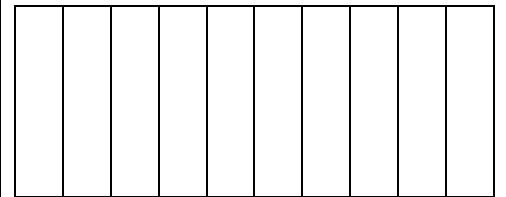
6

	3
	2
+	1



6

	2
	2
+	2



6

6

6

6

6

6

6

6

6

6

6

5	+	1	=	
---	---	---	---	--

2	+	4	=	
---	---	---	---	--

3 3 3 3 3 3 3 3 3 3

4 4 4 4 4 4 4 4 4 4

5 5 5 5 5 5 5 5 5 5

6 6 6 6 6 6 6 6 6 6

0 1 2 3 4 5 6

6 5 4 3 2 1 0

0



4

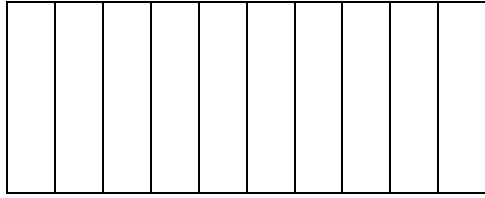
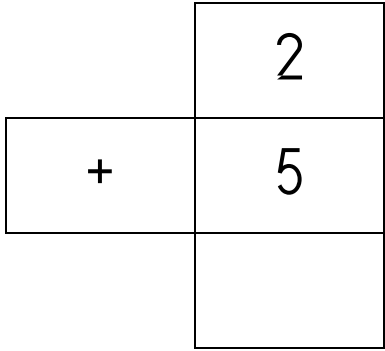
6

6

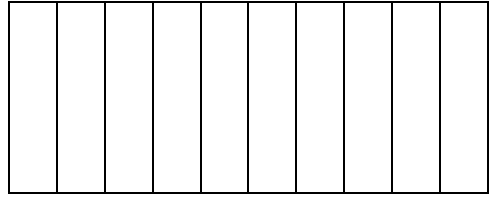
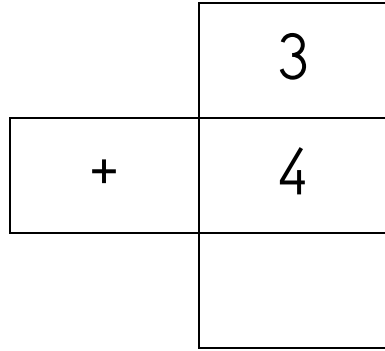
2

0

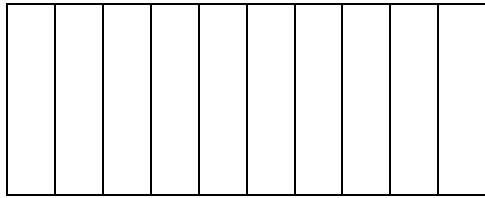
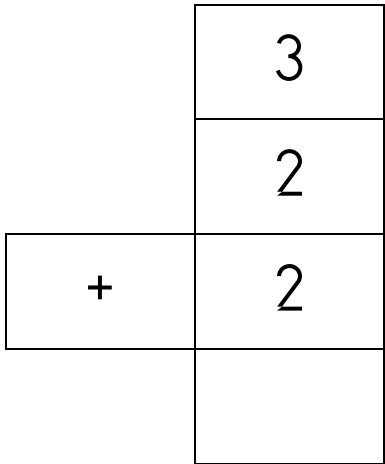
	<p>siete</p>	<p>siete</p>	<p>siete</p>
	<p>7</p>	<p>7</p>	<p>7</p>
<p>7 7 7 7 7</p>	<p>7 7 7 7 7</p>	<p>7 7 7</p>	<p>7 7 7</p>
<p>7 7 7 7 7</p>	<p>7 7 7 7 7</p>	<p>7 7 7</p>	<p>7 7 7</p>
<p>7 <input type="checkbox"/> <input type="checkbox"/> <input type="checkbox"/> <input type="checkbox"/> <input type="checkbox"/> <input type="checkbox"/> <input type="checkbox"/></p>	<p>7</p>	<p>7</p>	
<p>7</p>	<p>7</p>	<p>7</p>	



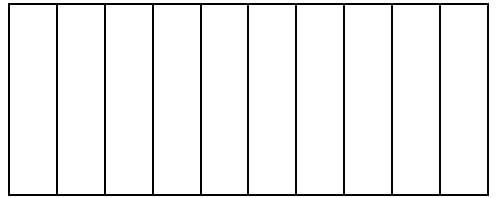
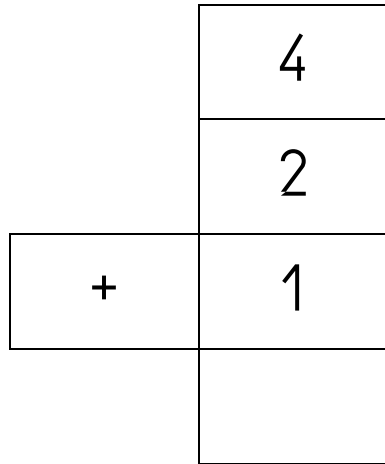
7



7



7



7

7

7

7

7

7

7

7

7

7

7

5

+

2

=

7

+

0

=

4 4 4 4 4 4 4 4 4 4 4

5 5 5 5 5 5 5 5 5 5 5

6 6 6 6 6 6 6 6 6 6 6

7 7 7 7 7 7 7 7 7 7 7

0 1 2 3 4 5 6 7

7 6 5 4 3 2 1 0

0

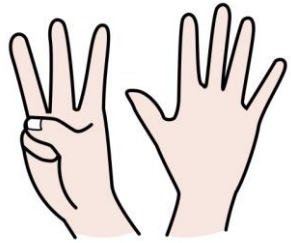
2

6 7

7

3

0



ocho

ocho

ocho

8

8

8

8

8

8

8

8

8

8

8

8

8

8

8

8

8

8

8

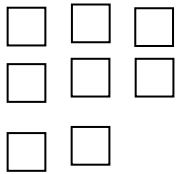
8

8

8

8

8



8

8

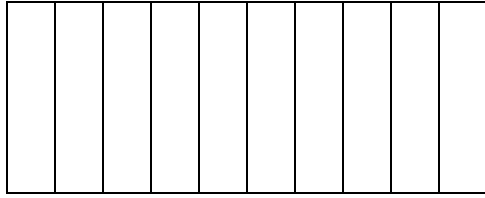
8

8

8

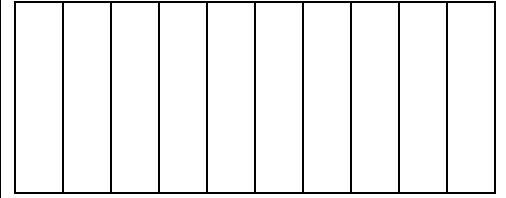


	5
+	3



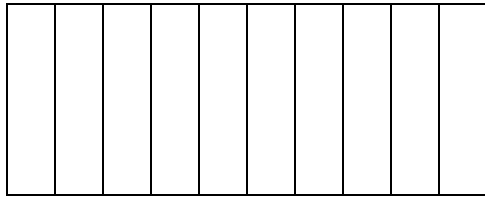
8

	6
+	2



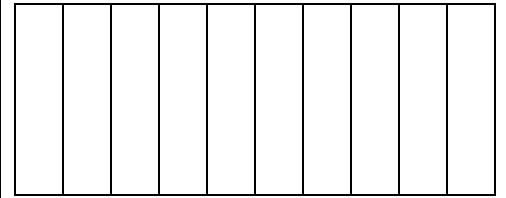
8

	1
	2
+	5



9

	3
	3
+	2



9

8

8

8

8

8

8

8

8

8

8

7

+

1

=

--

8

+

0

=

--

5 5 5 5 5 5 5 5 5 5 5

6 6 6 6 6 6 6 6 6 6 6

7 7 7 7 7 7 7 7 7 7 7

8 8 8 8 8 8 8 8 8 8 8

0 1 2 3 4 5 6 7 8

9 8 7 6 5 4 3 2 1 0

0

2

4

6

8


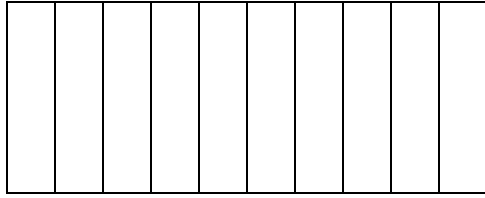
8

5


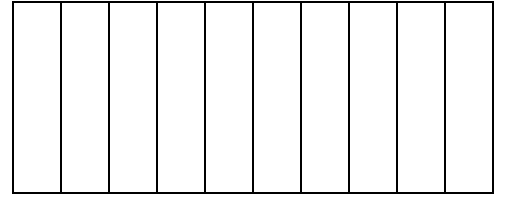
3

	<p>nueve</p>	<p>nueve</p>	<p>nueve</p>									
	<p>9</p>	<p>9</p>	<p>9</p>									
<p>9 9 9 9 9 9 9 9 9 9 9</p>												
<p>9 9 9 9 9 9 9 9 9 9 9</p>												
<p>9</p> <table border="1" data-bbox="414 1029 593 1204"> <tr><td></td><td></td><td></td></tr> <tr><td></td><td></td><td></td></tr> <tr><td></td><td></td><td></td></tr> </table>										<p>9</p>	<p>9</p>	
<p>9</p>	<p>9</p>	<p>9</p>										


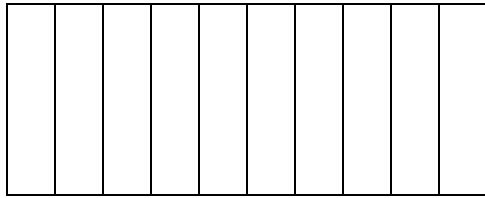
	5
+	4




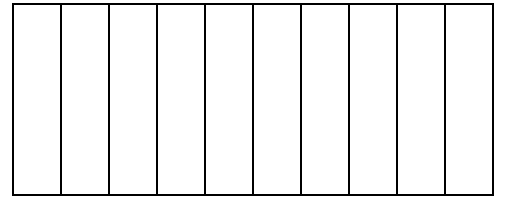
	6
+	3



	1
	3
+	5



	3
	3
+	3



7

+

2

=

--

8

+

1

=

--

6 6 6 6 6 6 6 6 6 6 6

7 7 7 7 7 7 7 7 7 7 7

8 8 8 8 8 8 8 8 8 8 8

9 9 9 9 9 9 9 9 9 9 9

0 1 2 3 4 5 6 7 8 9

9 8 7 6 5 4 3 2 1 0

0

2

4

6

9


9

7

5

3

1



diez

diez

diez

10

10

10

10

10

10

10

10

10

10

10

10

10

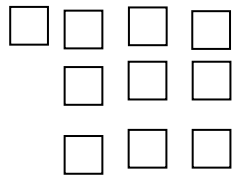
10

10

10

10

10



10

10

10

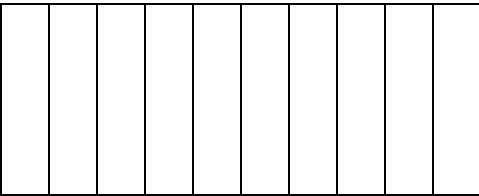
10

10

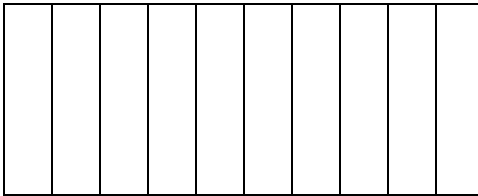
10




	5
+	5

									
10									


	6
+	4

									
10									

	2
	3
+	5

									
10									

	4
	1
+	5

									
10									

10 10 10 10 10 10 10

8	+	2	=	
---	---	---	---	--

4	+	6	=	
---	---	---	---	--

7 7 7 7 7 7 7 7 7 7 7

8 8 8 8 8 8 8 8 8 8 8

9 9 9 9 9 9 9 9 9 9 9

10 10 10 10 10 10 10 10

1 2 3 4 5 6 7 8 9 10

10 9 8 7 6 5 4 3 2 1

1			4			7			10
---	--	--	---	--	--	---	--	--	----

10						4			1
----	--	--	--	--	--	---	--	--	---

CUADERNO CALCULO SUMAS Y RESTAS CON RECTA NUMÉRICA

CALCULA USANDO LA RECTA NUMÉRICA



$$\boxed{0} + \boxed{1} = \boxed{1}$$



$$\boxed{1} + \boxed{1} = \boxed{}$$



$$\boxed{1} + \boxed{2} = \boxed{}$$



$$\boxed{1} + \boxed{3} = \boxed{}$$



$$\boxed{1} + \boxed{4} = \boxed{}$$

NOMBRE:

FECHA:

CALCULA USANDO LA RECTA NUMÉRICA



$$2 - 1 = 1$$



$$1 - 1 = \square$$



$$2 - 0 = \square$$



$$2 - 1 = \square$$



$$2 - 2 = \square$$

NOMBRE:

FECHA:

CALCULA USANDO LA RECTA NUMÉRICA



$$\boxed{1} + \boxed{5} = \boxed{}$$



$$\boxed{1} + \boxed{6} = \boxed{}$$



$$\boxed{1} + \boxed{7} = \boxed{}$$



$$\boxed{1} + \boxed{8} = \boxed{}$$



$$\boxed{1} + \boxed{9} = \boxed{}$$

NOMBRE:

FECHA:

CALCULA USANDO LA RECTA NUMÉRICA



$$\boxed{3} - \boxed{} = \boxed{}$$



$$\boxed{3} - \boxed{1} = \boxed{}$$



$$\boxed{3} - \boxed{2} = \boxed{}$$



$$\boxed{3} - \boxed{3} = \boxed{}$$



$$\boxed{4} - \boxed{0} = \boxed{}$$

NOMBRE:

FECHA:

CALCULA USANDO LA RECTA NUMÉRICA



$$\boxed{2} + \boxed{0} = \boxed{}$$



$$\boxed{2} + \boxed{1} = \boxed{}$$



$$\boxed{2} + \boxed{2} = \boxed{}$$



$$\boxed{2} + \boxed{3} = \boxed{}$$



$$\boxed{2} + \boxed{4} = \boxed{}$$

NOMBRE:

FECHA:

CALCULA USANDO LA RECTA NUMÉRICA



$$\boxed{4} - \boxed{} \boxed{1} = \boxed{}$$



$$\boxed{4} - \boxed{} \boxed{2} = \boxed{}$$



$$\boxed{4} - \boxed{} \boxed{3} = \boxed{}$$



$$\boxed{4} - \boxed{} \boxed{4} = \boxed{}$$



$$\boxed{5} - \boxed{} \boxed{0} = \boxed{}$$

NOMBRE:

FECHA:

CALCULA USANDO LA RECTA NUMÉRICA



<input type="text"/>	<input type="text"/>	<input type="text"/>	<input type="text"/>
----------------------	----------------------	----------------------	----------------------



<input type="text"/>	<input type="text"/>	<input type="text"/>	<input type="text"/>
----------------------	----------------------	----------------------	----------------------



<input type="text"/>	<input type="text"/>	<input type="text"/>	<input type="text"/>
----------------------	----------------------	----------------------	----------------------



<input type="text"/>	<input type="text"/>	<input type="text"/>	<input type="text"/>
----------------------	----------------------	----------------------	----------------------



<input type="text"/>	<input type="text"/>	<input type="text"/>	<input type="text"/>
----------------------	----------------------	----------------------	----------------------

NOMBRE:

FECHA: