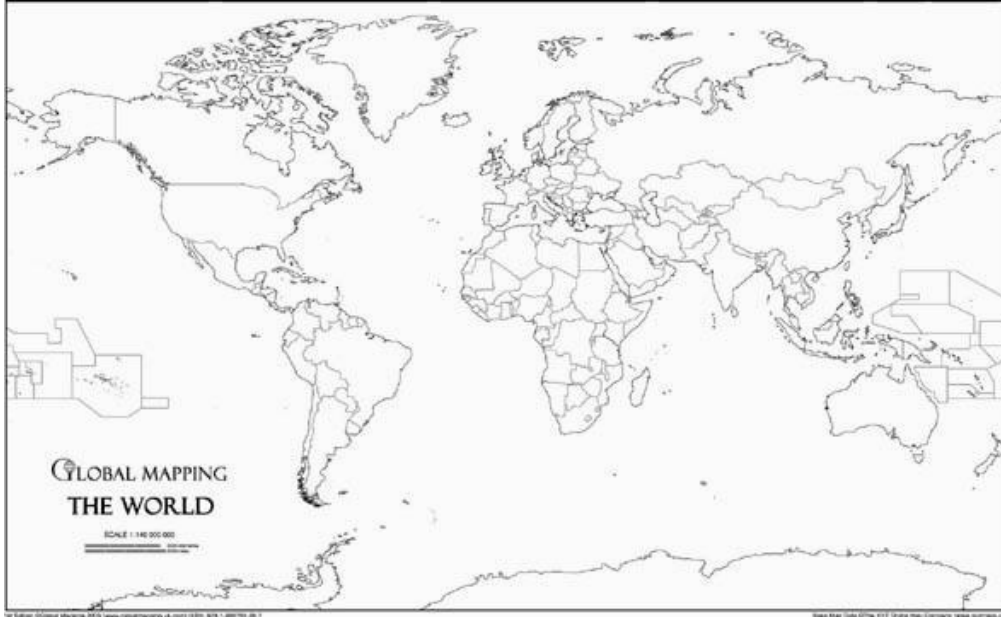
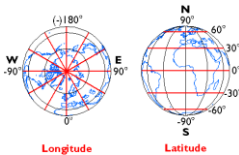


Geography Worksheet

1.- Locate on the world map the cities where María Zambrano, Gabriela Mistral, Indira Gandhi and Margaret Mead were born.



2.- Locate the geographic coordinates of those cities.



3.- They were active women who travelled a lot:

A. Margaret Mead set on a journey to New Zealand in January. What was the weather like when she arrived?

Describe the climate

Create a climograph using the annual data.

climograph

A graph that shows the annual (yearly) cycle of temperature and precipitation for a geographical location.

**REMEMBER!**

climate

The average weather conditions prevailing in an area over a long period of time.

weather

The state of the atmosphere at a place and time with regard to temperature, cloudiness, dryness, sunshine, wind, rain, etc

B. Gabriela Mistral left the capital city of her country for New York in July.  
Which season was it when she left Santiago de Chile?

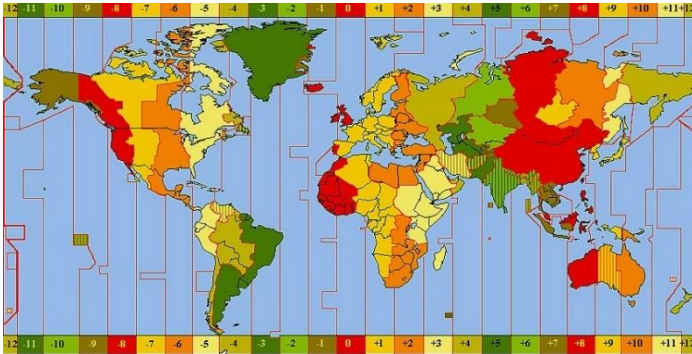


Which season is it when she arrives in New York?

Why does this happen?

C. Calculate the distance covered by each woman from the starting point to her destiny.

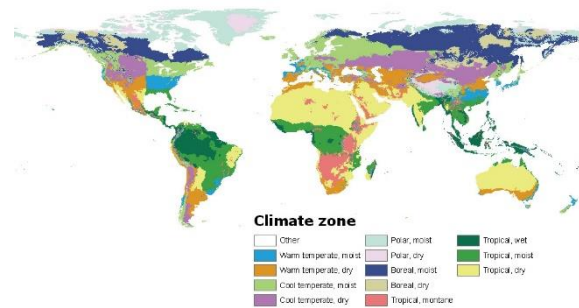
D. Once she reached her destination, Margaret decided to call Gabriela. It is 5 pm in New Zealand, what time is it when Gabriela receives the phone call in New York? Why is that?



4.- María Zambrano wants to tell Indira Ghandi about the climate in her hometown.

A. Use a climograph to explain Mediterranean climate.

Climate Zones



B. The climate in India, where Indira lives, is very different.  
Explain its climatic features.

5. - Gabriela climbed the highest mountain in her country.

- A. What is the mountain called?
- B. What is the altitude of this mountain?
- C. When she started climbing the temperature was 20° C. What will the temperature be on the mountaintop? Why?



6. - Let's move to Margaret's hometown.

- A. What is the average temperature in this city?
- B. What is the average temperature range?
- C. What is the rainfall distribution throughout the months of the year? Why?

7. - Name the seas and oceans that wash the shores of...

María's country:

Gabriela's country:

Indira's country:

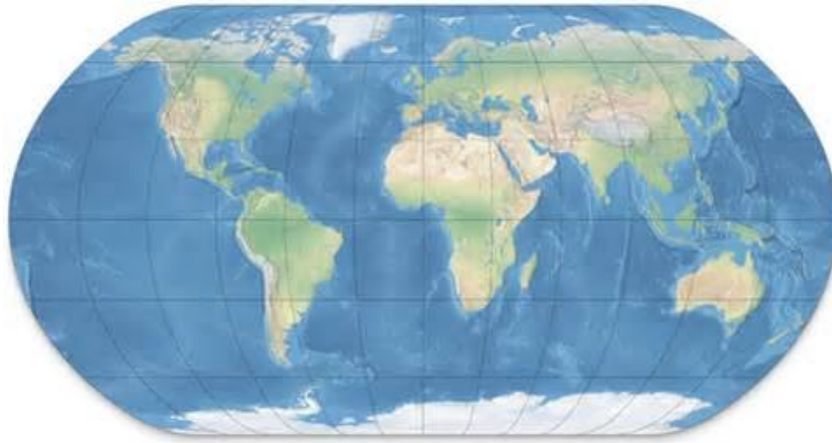
Which oceans and seas would Margaret cross if she travelled from New Zealand to Greenland?

8. - Imagine that they travel to Mount Kilimanjaro ...

- A. Which continent would they travel to?
- B. Who would cross the equator line?
- C. Which direction would each of them follow?
- D. Close to Mount Kilimanjaro, there is a lake where the longest river in the world rises. Name them.



- E. List the following rivers in order from the longest to the shortest and draw them on the map.  
 The Rhine    The Nile    The Yangtse    The Mississippi    The Amazon    The Ob



9.- They notice that plants and animals are very different depending on where you are.

- A. In which continent was each of these photographs taken?



- B. Name the natural environment where you can find these animal and plants



zebra

bear

kangaroo

penguin

panda bear

tiger

llama

linx

elephant



holm oak



taiga



cactus

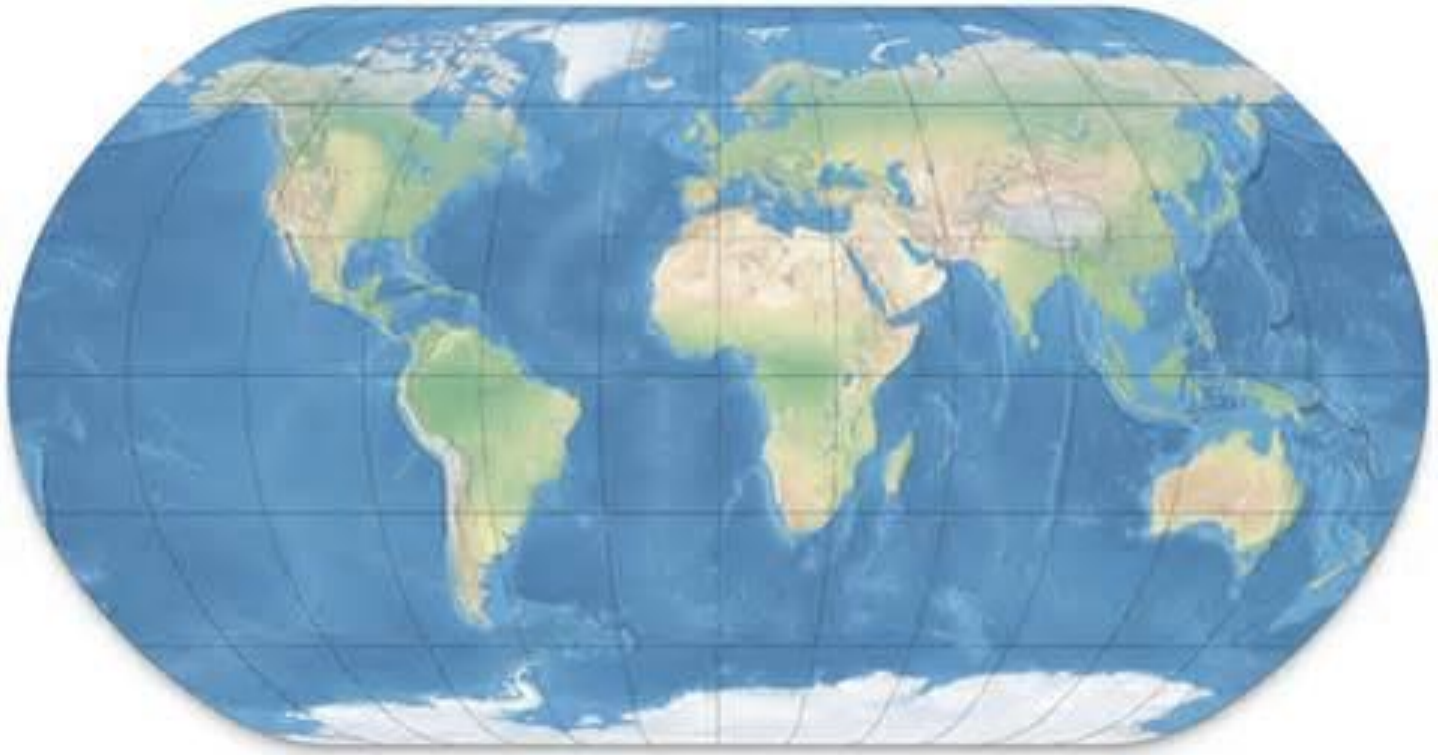


mangrove



liana

10.- Draw the trips of *María Zambrano*, *Gabriela Mistral*, *Indira Gandhi* and *Margaret Mead* in different colours on the map. Then name the geographical features they found on their way.



By Silvia Piñar Megías & Lourdes Ruiz Sánchez