

Name and surnames: .....

Year: ..... Date: .....

1. Explain in your own words what the digestive tract is.

.....

.....

2. Name the accessory glands and write down the digestive juices they secrete.

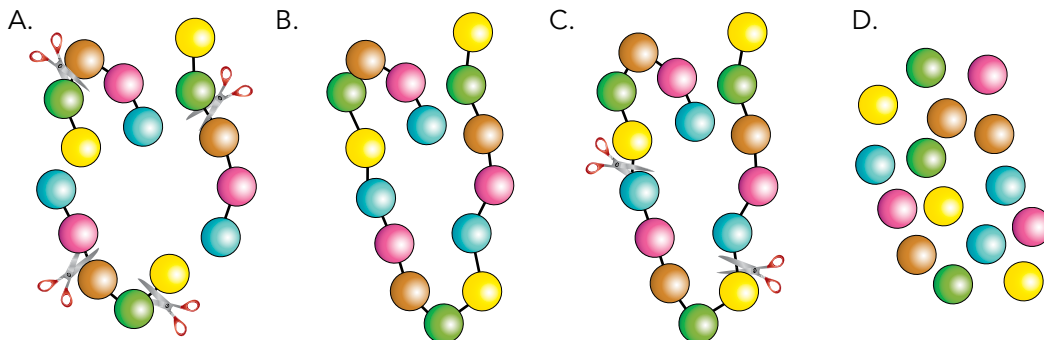
.....

.....

3. State which organs of the digestive system the following process take place in.

Organ	Process
	The insalivation of food takes place here.
	The bolus is turned into chyle.
	Its walls secrete gastric juices.
	Faeces are formed.
	It is the first tube through which the bolus passes with the help of peristaltic movements.

4. Put the stages of protein digestion in order and state where in the digestive system each one takes place.



Stage 1: .....

Stage 2: .....

Stage 3: .....

Stage 4: .....

5. Indicate which sentences correspond to healthy habits related to the sense organs.

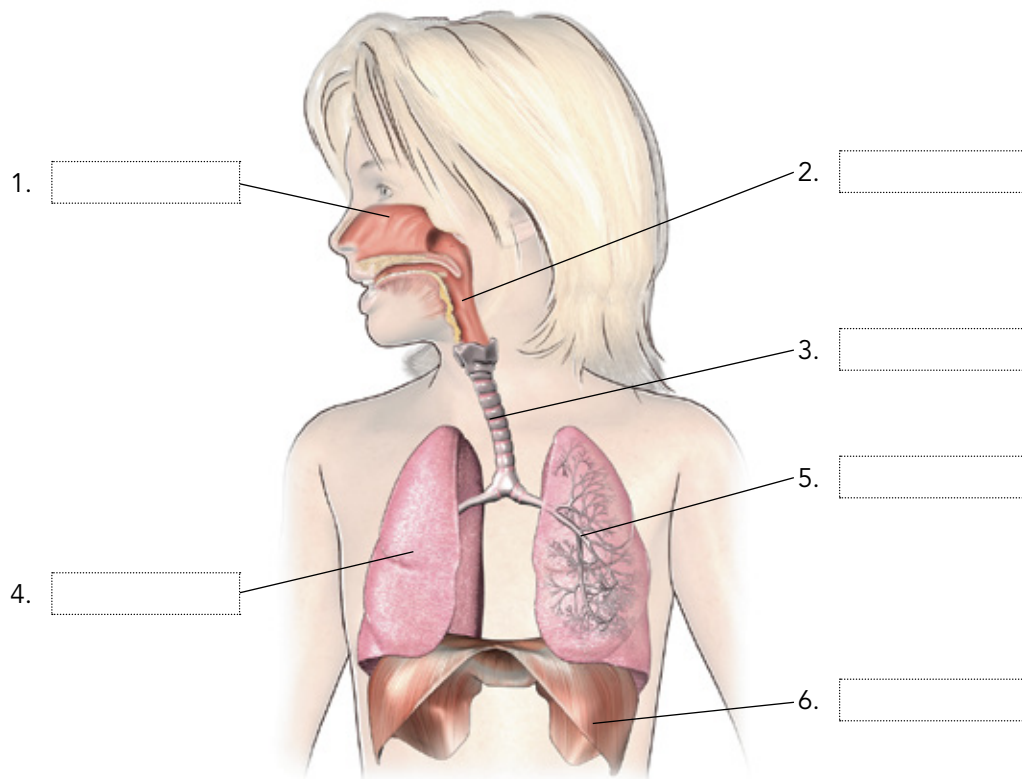
A. Avoid bright lights. ☐

B. Go to places where there is a lot of traffic. ☐

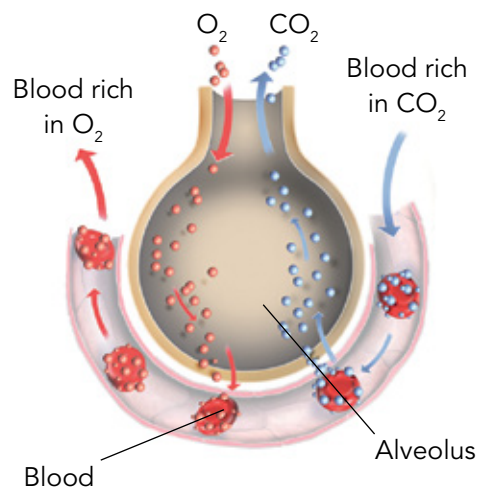
C. Read with enough light. ☐

D. Follow a diet that is low in vitamin A. ☐

6. In the following picture, name the numbered parts of the respiratory system and circle the parts that make up the respiratory tract.



7. Look at the diagram and explain how gas exchange takes place.



.....

.....

.....

.....

.....